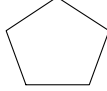
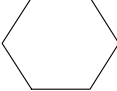
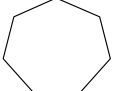
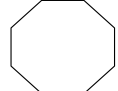

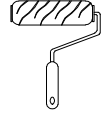


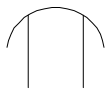


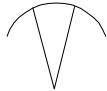
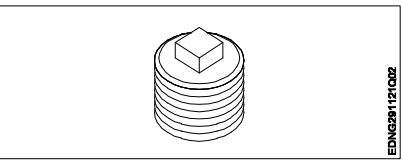
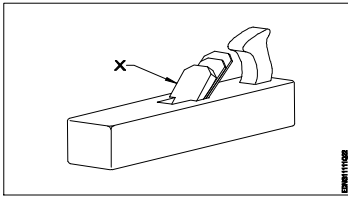
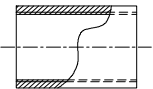
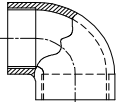
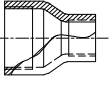
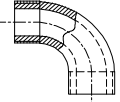
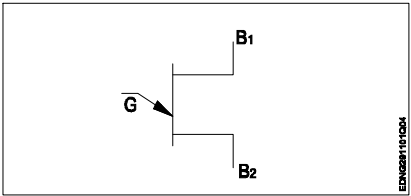
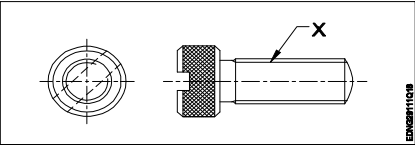
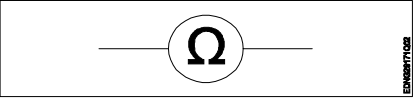
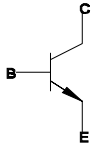
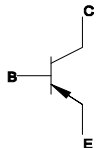
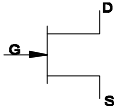
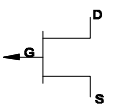
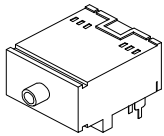
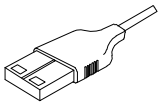
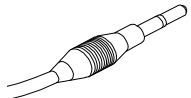
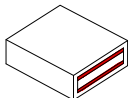


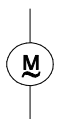
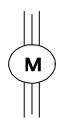
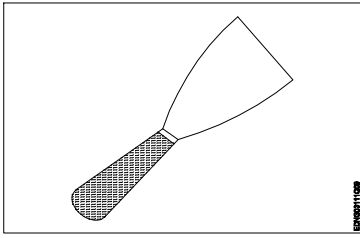
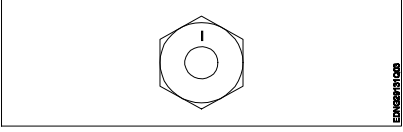

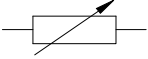


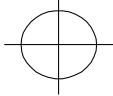
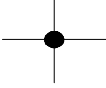
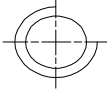



Name of the Trade : Engineering Drawing

#	Question	OPT A	OPT B	OPT C	OPT D	Ans	Level	Topic of syllabus
1	Which is the largest size of drawing sheet?	A0	A1	A2	A4	A	1	Sizes and layout of drawing sheets
2	Which figure is hexagon?					B	1	Drawing of geometrical figures
3	Which is Roller brush?					B	1	Trade Related Hand Tools
4	Which is the symbol of fillet welded joint?					B	1	Symbolic representation
5	What is the name of pipe fitting? 	Cap	Elbows	Coupling	Plug	D	1	Symbolic Representations
6	Which view is obtained on the vertical plane?	Front view	Top view	Left side view	Right side view	A	1	Method of 1 st and 3 rd

<p>7 Name the part marked X.</p> 	Wedge	Stock	Handle	Sole	A	1	Trade Related Hand Tools
<p>8 Which is Elbow?</p>					B	1	Trade Related Hand Tools
<p>9 Name the symbol.</p> 	SCR	UJT	DIAC	TRIAC	B	1	Symbolic representation
<p>10 What is the name of the part marked 'X'?</p> 	Knurling	Thread	Slot	Neck	B	1	Dimensioning
<p>11 Identify the symbol.</p> 	Voltmeter	Ammeter	Ohm meter	Watt meter	C	1	Symbolic representation

12 Which is NPN transition?					A	1	Symbolic representation
13 Which is USB male connector?					B	1	Hardware components
14 Identify the socket spanner type.	12 point deep	12 point standard	6 point deep	6 point standard	A	1	Free hand drawing
15 Which is the single phase AC motor symbol?					C	1	Symbolic representation
16 Identify the tool.	Scraper Knife	Roller brush	Spray gun	DFT gauge	A	1	Trade Related Hand Tools
							

17	What is the material for the given grade of a fastener? 	Carbon steel	Medium carbon steel	Medium carbon steel quenched	Medium carbon steel quenched and tempered	A	1	Symbolic representation
18	Which is the symbol of variable resistor?					B	1	Drawing of geometrical figures
19	Which is the symbolic representation of snap headed rivet?					A	1	Symbolic representation
20	Identify the type of coast line.	Steep coast	Flat coast	Surveyed coast	Rocky coast	A	1	Reading of navigation chart

